

# 淡江大學 95 學年度進修學士班轉學生招生考試試題

13

系別：電機工程學系三年級

科目：電 子 學

13-1

准帶項目請打「√」	
√	簡單型計算機

本試題共 2 頁 - 1

本試題雙面印製

1. Assume that the operational amplifier in the circuit of Fig. 1 is ideal. Derive the voltage gain  $V_o/V_i$  of this noninverting amplifier. (20%)

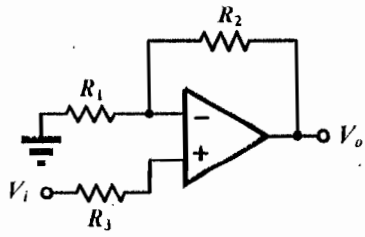


Fig. 1

2. Assume that the diodes  $D_1$  and  $D_2$  in the circuit of Fig. 2 are ideal, find the values of the labeled voltage  $V$  and current  $I$ . (20%)

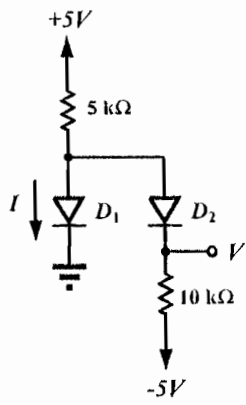


Fig. 2

3. For the circuit in Fig. 3,  $V_{in} = 1V$ ,  $\mu_n C_{ox} = 20 \mu A/V^2$ ,  $L = 10 \mu m$ , and  $W = 30 \mu m$ . Neglect the channel length modulation and body effect, find the labeled voltage  $V_2$  and current  $I_1$ . (20%)

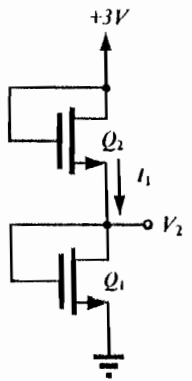


Fig. 3

# 淡江大學 95 學年度進修學士班轉學生招生考試試題

系別：電機工程學系三年級

科目：電 子 學

13-2

准帶項目請打「✓」	
✓	簡單型計算機

本試題共 2 頁 →

4. For the circuit in Fig. 4, the BJT has a common-emitter current gain  $\beta = 100$ ,  $V_{BE} = 0.7V$ , and  $R_B = 100k\Omega$ . Find the dc currents  $I_B$ ,  $I_C$ , and  $I_E$ , and dc voltage  $V_B$ ,  $V_C$ , and  $V_E$ . (20%)

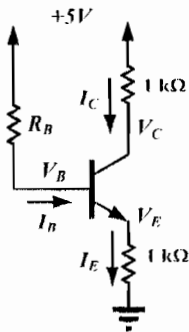


Fig. 4

5. For the NMOS amplifier in Fig. 5, replace the transistor with its equivalent small-signal model, ignore the channel length modulation and body effect. Derive expressions for the voltage gains  $v_s/v_i$  and  $v_d/v_i$ . [utilize  $g_m$  to represent the transconductance of transistor] (20%)

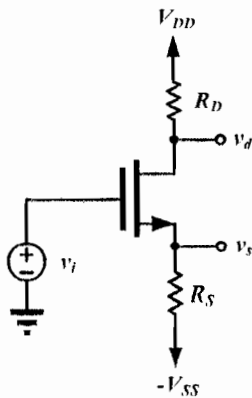


Fig. 5