

淡江大學 100 學年度轉學生招生考試試題

34

系別：物理學系三年級

科目：電 磁 學

考試日期：7月19日(星期二) 第3節

本試題共 4 大題， 1/1 頁

※ 請詳細列出各步驟及計算過程,否則不予計分.

※ 每題 25 分.

1. A thin insulating rod of length L lies along x -axis and carries a uniformly distributed charge $+Q$.
 - (a) Find the electric field at a point P along its axis at a distance d from one end as shown in Fig. 1.
 - (b) At large distances from the rod (that is, where $d \gg L$), what is the field of the rod? Give some discussion on your results.
 - (c) Find the potential at a point P .

2. A point charge q is held a distance d above an infinite grounded conducting plane, (x - y plane at $z = 0$) as shown in Fig. 2.
 - (a) What are the boundary conditions for the potential V in the region above the plane ($z \geq 0$)?
 - (b) Find the potential $V(x,y,z)$ in the region above the plane, $z \geq 0$, and prove that it satisfy the boundary conditions.

3. A straight segment of wire carries a steady current I , as shown in Fig. 3.
 - (a) Find the magnetic field at a point P generated by the segment of wire.
 - (b) What is the field at P for the straight-line extended to infinite?
 - (c) Find the force per unit length between two long, parallel wires a distance d apart, carrying currents I_1 and I_2 .

4. A square loop of wire, of side a , lies midway of a very long rectangular loop of short side $3a$. (Actually, the short ends are so far away that they can be neglected.) A counterclockwise current I in the square loop is gradually increasing $dI/dt = k$ (a constant), as shown in Fig. 4.
 - (a) What is the flux through the long rectangular loop?
 - (b) Find the mutual inductances.
 - (c) Find the emf induced in the large loop. Which way will the induced current flow?

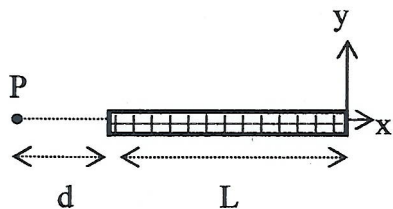


Fig. 1

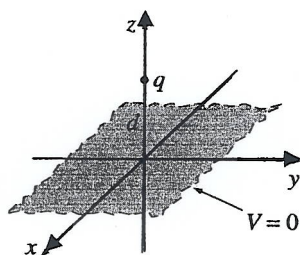


Fig. 2

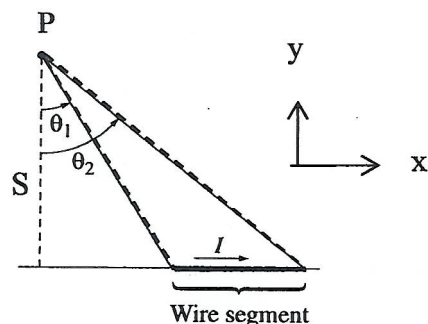


Fig. 3

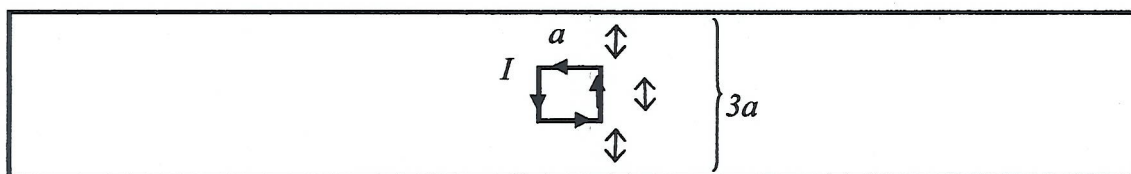


Fig. 4